

Worksheet 9

Contents

- To accompany Section 4.4 Introduction to Filters
- Frequency Selective Filters
- Ideal Low-Pass Filter (LPF)
- Butterworth low-pass filter
- High-pass filter (HPF)
- Band-pass filter (BPF)
- Solutions

To accompany Section 4.4 Introduction to Filters

This worksheet can be downloaded as a [PDF file](#). We will step through this worksheet in class.

An annotatable copy of the notes for this presentation will be distributed before the second class meeting as **Worksheet 9** in the **Week 6: Classroom Activities** section of the Canvas site. I will also distribute a copy to your personal **Worksheets** section of the **OneNote Class Notebook** so that you can add your own notes using OneNote.

You are expected to have at least watched the video presentation of [Unit 4.4: Introduction to Filters](#) of the [notes](#) before coming to class. If you haven't watch it afterwards!

After class, the lecture recording and the annotated version of the worksheets will be made available through Canvas. We will step through this worksheet in class.

Frequency Selective Filters

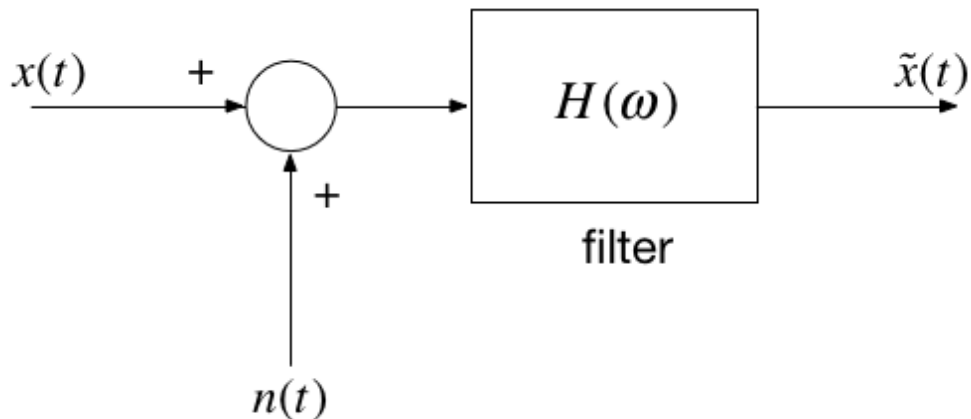
An ideal frequency-selective filter is a system that let's the frequency components of a

[Skip to main content](#)

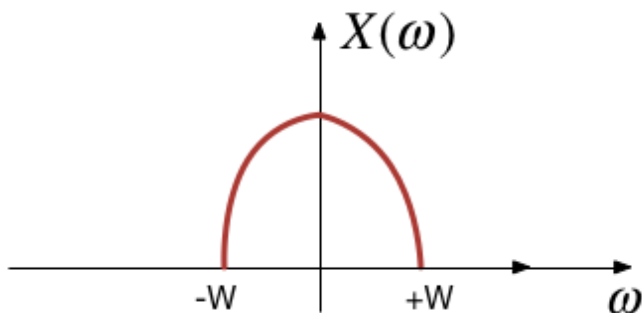
completely cut off.

- The range of frequencies which are let through belong to the **pass Band**
- The range of frequencies which are cut-off by the filter are called the **stopband**
- A typical scenario where filtering is needed is when noise $n(t)$ is added to a signal $x(t)$ but that signal has most of its energy outside the bandwidth of a signal.

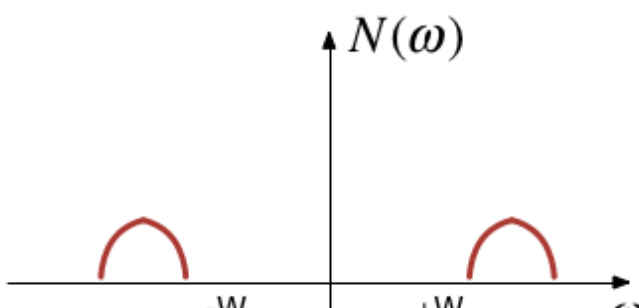
Typical filtering problem



Signal

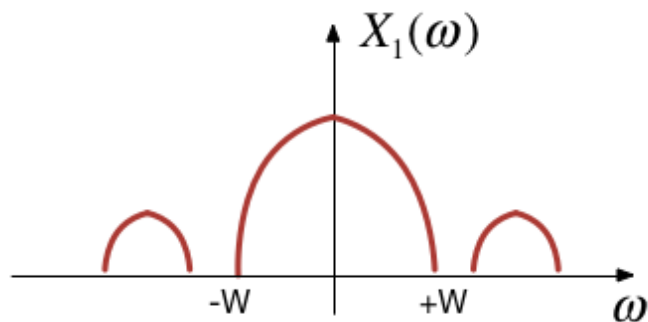


Out-of-Bandwidth Noise

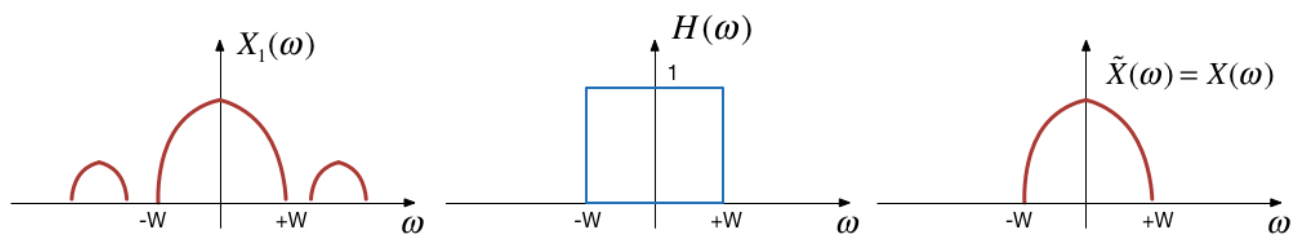


[Skip to main content](#)

Signal plus Noise



Filtering



Motivating example

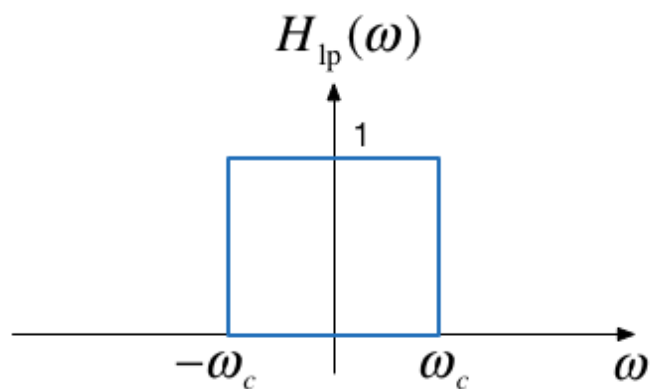
See the video and script on [Canvas Week 7](#).

Ideal Low-Pass Filter (LPF)

An ideal low pass filter cuts-off frequencies higher than its *cutoff frequency*, ω_c .

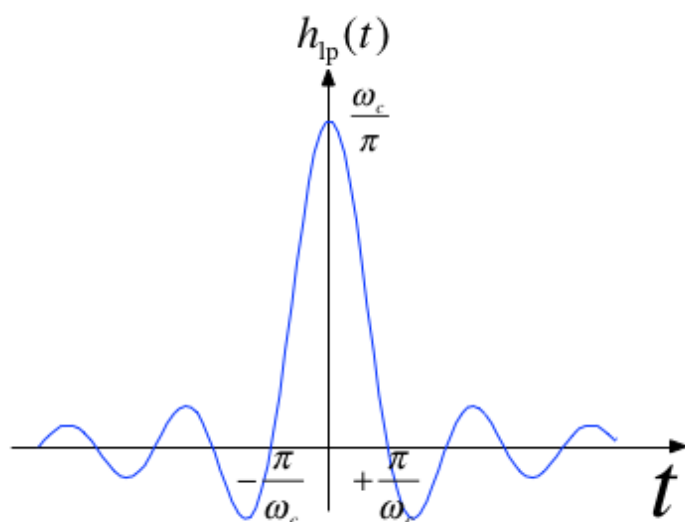
$$H_{lp}(\omega) = \begin{cases} 1, & |\omega| \leq \omega_c \\ 0, & |\omega| \geq \omega_c \end{cases}$$

Frequency response of an ideal LPF



Impulse response of an ideal LPF

$$h_{lp}(t) = \frac{\omega_c}{\pi} \operatorname{sinc}\left(\frac{\omega_c}{\pi} t\right)$$



Filtering is Convolution

The output of an LTI system with impulse response

$$h(t) \Leftrightarrow H(\omega)$$

subject to an input signal

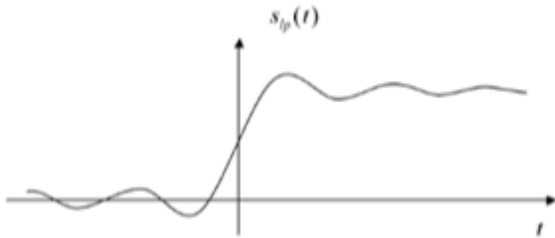
$$x(t) \Leftrightarrow X(\omega)$$

[Skip to main content](#)

$$y(t) = h(t) * x(t) \Leftrightarrow Y(\omega) = H(\omega)X(\omega)$$

Issues with the "ideal" filter

This is the step response:



(reproduced from [Boulet, 2006] Fig. 5.23 p. 205)

Ripples in the impulse response would be undesirable, and because the impulse response is non-causal it cannot actually be implemented.

Butterworth low-pass filter

N-th Order Butterworth Filter

$$|H_B(\omega)| = \frac{1}{\left(1 + \left(\frac{\omega}{\omega_c}\right)^{2N}\right)^{\frac{1}{2}}}$$

Remarks

- DC gain is

$$|H_B(j0)| = 1$$

- Attenuation at the cut-off frequency is

$$|H_B(j\omega_c)| = 1/\sqrt{2}$$

for any N

More about the Butterworth filter: [Wikipedia Article](#)

[Skip to main content](#)

Example 5: Second-order BW Filter


The second-order butterworth Filter is defined by Characteristic Equation (CE):

$$p(s) = s^2 + \omega_c \sqrt{2}s + \omega_c^2 = 0^*$$

Calculate the roots of $p(s)$ (the poles of the filter transfer function) in both Cartesian and polar form.

Note: This has the same characteristic as a control system with damping ratio $\zeta = 1/\sqrt{2}$ and $\omega_n = \omega_c$!

Solution to example 5



Example 6

Derive the differential equation relating the input $x(t)$ to output $y(t)$ of the 2nd-Order Butterworth Low-Pass Filter with cutoff frequency ω_c .

Solution to example 6



Example 7

Determine the frequency response $H_B(\omega) = Y(\omega)/X(\omega)$

Solution to example 7



Magnitude of frequency response of a 2nd-order Butterworth Filter

```
wc = 100;
```

Transfer function

```
H = tf(wc^2,[1, wc*sqrt(2), wc^2])
```

Magnitude frequency response

```
w = -400:400;
mHlp = 1./(sqrt(1 + (w./wc).^4));
plot(w,mHlp)
grid
ylabel('|H_B(j\omega)|')
title('Magnitude Frequency Response for 2nd-Order LP Butterworth Filter (\omega_c)')
xlabel('Radian Frequency \omega [rad/s]')
text(100,0.1,'\omega_c')
text(-100,0.1,'-\omega_c')
hold on
plot([-400,-100,-100,100,100,400],[0,0,1,1,0,0],'r:')
hold off
```

Bode plot

```
bode(H)
grid
title('Bode-plot of Butterworth 2nd-Order Butterworth Low Pass Filter')
```

Note that the attenuation of the filter is flat at 0 dB in the pass-band at frequencies below the cut-off frequency $\omega < \omega_c$; has a value of -3 dB at the cut-off frequency $\omega = \omega_c$; and has a “roll-off” (rate of decrease) of $N \times 20$ dB/decade in the stop-band.

In this case, $N = 2$, and $\omega_c = 100$ rad/s so the attenuation is -40 dB at $\omega = 10\omega_c = 1,000$ rad/s and $\omega = -80$ dB at $\omega = 100\omega_c = 10,000$ rad/s.

Example 8

Determine the impulse and step response of a butterworth low-pass filter.

You will find this Fourier transform pair useful:

$$e^{-at} \sin \omega_0 t u_0(t) \Leftrightarrow \frac{\omega_0}{(j\omega + a)^2 + \omega_0^2}$$

Solution to example 8



Impulse response

```
impulse(H,0.1)
grid
title('Impulse Response of 2nd-Order Butterworth Low Pass Filter')
```

Step response

```
step(H,0.1)
title('Step Response of Butterworth 2nd-Order Butterworth Low Pass Filter')
```

[Skip to main content](#)

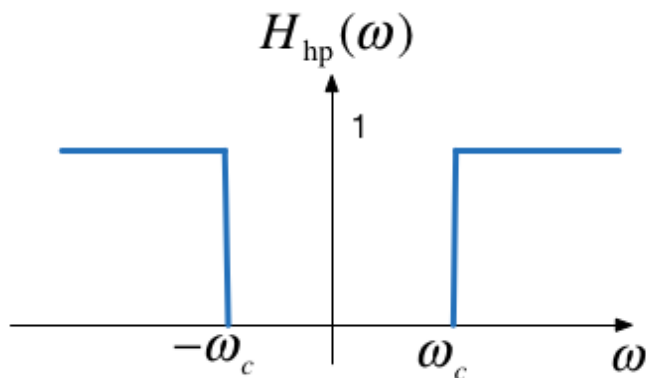
```
grid
text(0.008,1,'s_B(t) for \omega_c = 100 rad/s')
```

High-pass filter (HPF)

An ideal highpass filter cuts-off frequencies lower than its *cutoff frequency*, ω_c .

$$H_{\text{hp}}(\omega) = \begin{cases} 0, & |\omega| \leq \omega_c \\ 1, & |\omega| > \omega_c \end{cases}$$

Frequency response of an ideal HPF



Responses

Frequency response

$$H_{\text{hp}}(\omega) = 1 - H_{\text{lp}}(\omega)$$

Impulse response

$$h_{\text{hp}}(t) = \delta(t) - h_{\text{lp}}(t)$$

Example 9

Determine the frequency response of a 2nd-order butterworth highpass filter

[Skip to main content](#)

Solution to example 9



Magnitude frequency response

```
w = -400:400;
plot(w,1-mHlp)
grid
ylabel('|H_B(j\omega)|')
title('Magnitude Frequency Response for 2nd-Order HP Butterworth Filter (\omega_c)')
xlabel('Radian Frequency \omega [rad/s]')
text(100,0.9,'\omega_c')
text(-100,0.9,'-\omega_c')
hold on
plot([-400,-100,-100,100,100,400],[0,0,1,1,0,0],'r:')
hold off
```

High-pass filter

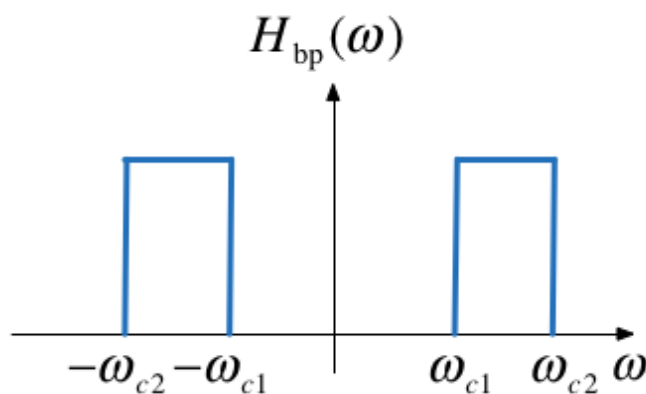
```
Hhp = 1 - H
bode(Hhp)
grid
title('Bode-plot of Butterworth 2nd-Order Butterworth High Pass Filter')
```

Band-pass filter (BPF)

An ideal bandpass filter cuts-off frequencies lower than its first *cutoff frequency* ω_{c1} , and higher than its second *cutoff frequency* ω_{c2} .

$$H_{bp}(\omega) = \begin{cases} 1, & \omega_{c1} < |\omega| < \omega_{c2} \\ 0, & \text{otherwise} \end{cases}$$

Frequency response of an ideal BPF



Bandpass filter design

A bandpass filter can be obtained by multiplying the frequency responses of a lowpass filter by a highpass filter.

$$H_{bp}(\omega) = H_{hp}(\omega)H_{lp}(\omega)$$

- The highpass filter should have cut-off frequency of ω_{c1}
- The lowpass filter should have cut-off frequency of ω_{c2}

Solutions

Solutions to Examples 5-9 are captured as a PenCast which you will find attached to the Worked Solutions section of the [Week 7 Section](#) of the Canvas course site or here [filters2.pdf](#)

